

Unit 6 Module 2 | Session 1

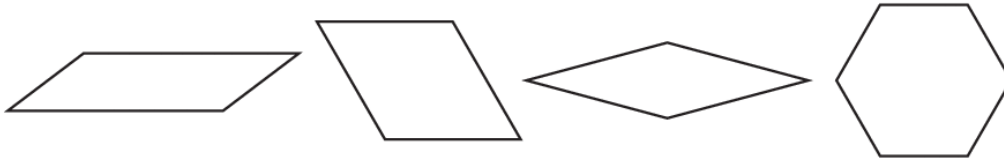
NAME _____

DATE _____

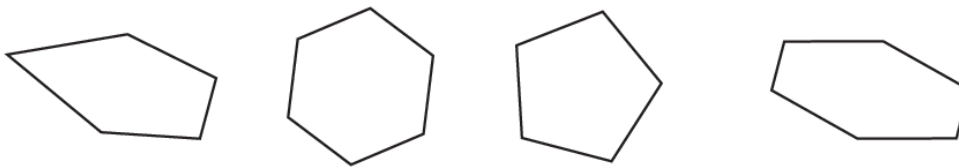


Polygons & Time


- 1 Two of the shapes below are rhombuses, and two are not. Circle the two rhombuses.



- 2 Circle the two irregular polygons.



- 3 Write the time shown on each clock.



- 4 Ava boards her school bus at 7:48 in the morning. She arrives at school at 8:07. How long does it take Ava to get to school? Show your work.