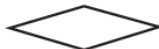
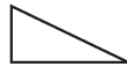



Unit 6 Module 2 | Session 4 class set, plus 1 copy for display

NAME \_\_\_\_\_

DATE \_\_\_\_\_

**Polygons & Quadrilaterals Checkpoint** page 1 of 2**1** Find and circle the quadrilaterals below.**A****B****C****D****E****F****G****H****2** How are parallelograms like rhombuses and rectangles? Use words or labeled sketches to tell or show one way in which these shapes are alike.**3** Circle the polygons below.**A****B****C****D****4** Damon says that this figure is not a polygon. Do you agree with him? Why or why not? Give two different reasons.