

Unit 6 Module 3 | Session 4 1 copy for display

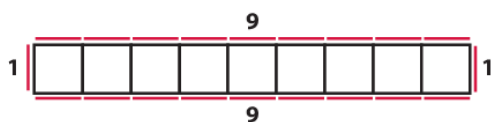
NAME _____

DATE _____



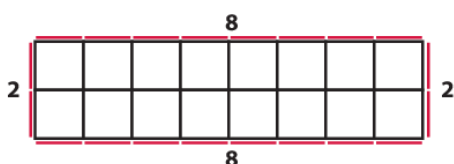
One More Look at Emery's Tables

The other day, you helped Emery arrange rectangular tables that would each seat 20 guests. Here are the rectangles you made. Work with your classmates to find the perimeter and area of each one.



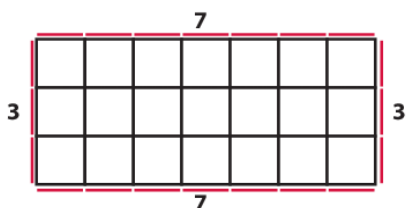
Perimeter _____ linear units

Area _____ square units



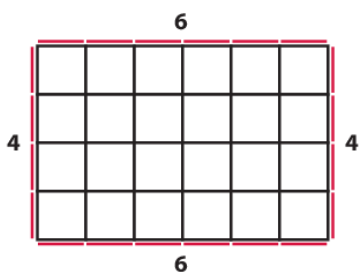
Perimeter _____ linear units

Area _____ square units



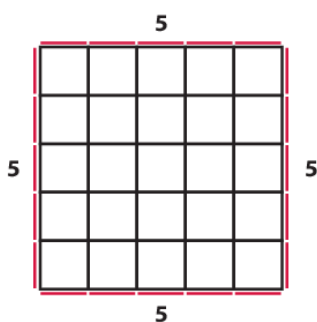
Perimeter _____ linear units

Area _____ square units



Perimeter _____ linear units

Area _____ square units



Perimeter _____ linear units

Area _____ square units