
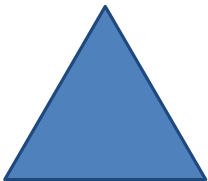





Parallelograms

Grade 2 Geometry Worksheet

Answer the questions beside each shape.

	<p>Does it have 4 sides?</p> <p>Are the opposite sides parallel?</p> <p>Is it parallelogram?</p>	<p>Yes</p> <p>Yes</p> <p>Yes</p>	<p>No</p> <p>No</p> <p>No</p>
	<p>Does it have 4 sides?</p> <p>Are the opposite sides parallel?</p> <p>Is it parallelogram?</p>	<p>Yes</p> <p>Yes</p> <p>Yes</p>	<p>No</p> <p>No</p> <p>No</p>
	<p>Does it have 4 sides?</p> <p>Are the opposite sides parallel?</p> <p>Is it parallelogram?</p>	<p>Yes</p> <p>Yes</p> <p>Yes</p>	<p>No</p> <p>No</p> <p>No</p>
	<p>Does it have 4 sides?</p> <p>Are the opposite sides parallel?</p> <p>Is it parallelogram?</p>	<p>Yes</p> <p>Yes</p> <p>Yes</p>	<p>No</p> <p>No</p> <p>No</p>
	<p>Does it have 4 sides?</p> <p>Are the opposite sides parallel?</p> <p>Is it parallelogram?</p>	<p>Yes</p> <p>Yes</p> <p>Yes</p>	<p>No</p> <p>No</p> <p>No</p>