
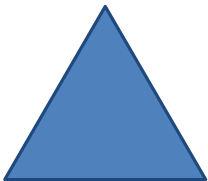

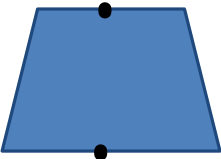
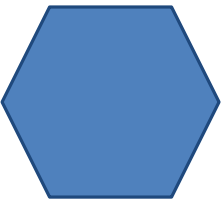


Parallelograms

Van 5/4/20

Grade 2 Geometry Worksheet

Answer the questions beside each shape.

| | | | |
|---|--|----------------------------------|-------------------------------|
|  | <p>Does it have 4 sides?</p> <p>Are the opposite sides parallel?</p> <p>Is it parallelogram?</p> | <p>Yes</p> <p>Yes</p> <p>Yes</p> | <p>No</p> <p>No</p> <p>No</p> |
|  | <p>Does it have 4 sides?</p> <p>Are the opposite sides parallel?</p> <p>Is it parallelogram?</p> | <p>Yes</p> <p>Yes</p> <p>Yes</p> | <p>No</p> <p>No</p> <p>No</p> |
|  | <p>Does it have 4 sides?</p> <p>Are the opposite sides parallel?</p> <p>Is it parallelogram?</p> | <p>Yes</p> <p>Yes</p> <p>Yes</p> | <p>No</p> <p>No</p> <p>No</p> |
|  | <p>Does it have 4 sides?</p> <p>Are the opposite sides parallel?</p> <p>Is it parallelogram?</p> | <p>Yes</p> <p>Yes</p> <p>Yes</p> | <p>No</p> <p>No</p> <p>No</p> |
|  | <p>Does it have 4 sides?</p> <p>Are the opposite sides parallel?</p> <p>Is it parallelogram?</p> | <p>Yes</p> <p>Yes</p> <p>Yes</p> | <p>No</p> <p>No</p> <p>No</p> |