


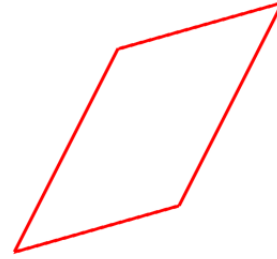
Classify Quadrilaterals Worksheet

Classify (name) the quadrilaterals.


1 a.



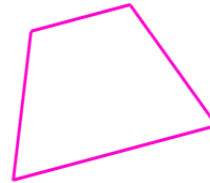
1 b.



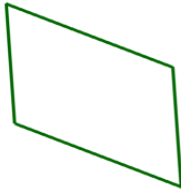
2 a.




2 b.




3 a.



3 b.



4 a.



4 b.

