

Unit 5 Module 2 | Session 1

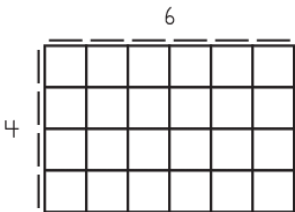
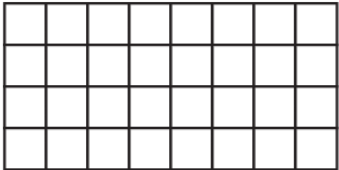



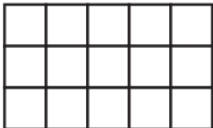
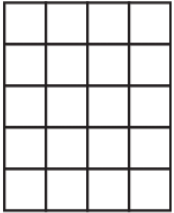
NAME _____

DATE _____



An Array of Fact Families

Label each array below with its dimensions. Then write a multiplication and division fact family to match.

<p>ex</p>  <p> $4 \times 6 = 24$ $24 \div 6 = 4$ $6 \times 4 = 24$ $24 \div 4 = 6$ </p>	<p>1</p> 
<p>2</p> 	<p>3</p> 
<p>4</p> 	<p>5</p> 
<p>6</p> 	<p>7</p> 